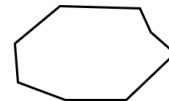
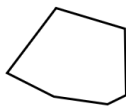
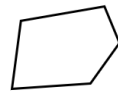
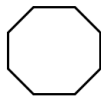

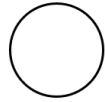
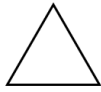


Síkidomok és testek

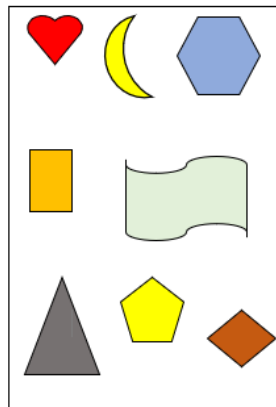
Síkidomok, sokszögek

1) Síkidomok vagy sokszögek?



Tovább a feladathoz

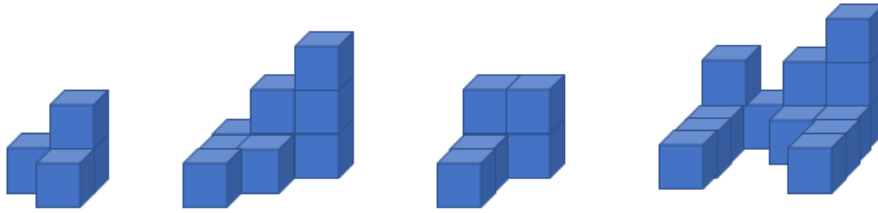
2) Számoljuk meg, hogy Annácska rajzán hány síkidom, hány sokszög van, és nevezzük is meg a sokszögeket!



Tovább a feladathoz


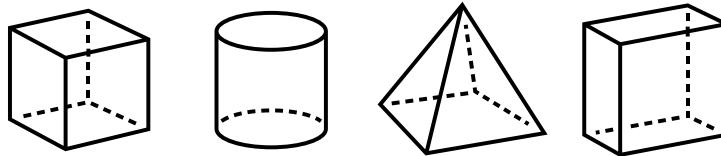
Testek

3) Hány kiskocka van a képen? Hány kell még ahhoz, hogy egy kockát alakítsunk ki?



Tovább a feladathoz


4) Milyen lapok alkotják a testeket?



Tovább a feladathoz

Tükrözés

5) Lehet-e az ábráknak tükrötengelye? Ha nem, miért nem? Ha igen, akkor hol van?



Tovább a feladathoz